

The background of the cover features a blue-tinted image of an astronaut in a white spacesuit standing on the moon's surface. To the left, a portion of the Earth is visible. The entire scene is overlaid with various mathematical formulas and equations in a glowing purple and blue font, creating a STEM-themed aesthetic.

FROEBEL BILINGUAL SCHOOL
A STEM SCHOOL

**MATH SKILLS
SHARPENERS**

GOING TO NINTH GRADE

MATH SUMMER WORKBOOK

A STEM School

FROEBEL
BILINGUAL SCHOOL

Home of the Space Generation



2023 SUMMER MATHEMATIC SKILLS SHARPENER Going to Ninth Grade

STUDENT'S NAME	DATE
TEACHER COMING FROM	SCORE
TEACHER GOING TO	
PARENT'S SIGNATURE	DATE RECEIVED

SKILLS SHARPENER FOR STUDENTS GOING TO NINTH GRADE MATH

WEEK 1.

Day 1.1 - Write the fraction as a decimal.

1) $\frac{8}{25}$

2) $\frac{-5}{18}$

3) $1\frac{9}{20}$

4) $1\frac{6}{11}$

Day 1.2 - Write the decimal as a fraction.

1) 0.25

2) $0.\bar{5}$

3) -0.3

4) 0.4

Day 1.3 - Find the sum or difference and simplify.

1) $\frac{3}{8} + \frac{2}{8}$

2) $\frac{-1}{6} + \frac{5}{6}$

3) $\frac{2}{15} - \frac{7}{15}$

4) $\frac{1}{12} - \left(\frac{-7}{12}\right)$

5) $1\frac{1}{2} + 1\frac{1}{2}$

6) $6\frac{2}{3} + 3\frac{1}{3}$

7) $4\frac{1}{5} - 2\frac{3}{5}$

8) $-3\frac{2}{7} - 6\frac{3}{7}$

Day 1.4 - Simplify the expression.

1) $\frac{5x}{8} + \frac{x}{8}$

2) $\frac{2n}{15} + \frac{7n}{15}$
a)

3) $\frac{m}{21} - \frac{5m}{21}$

4) $\frac{d}{6} + \frac{2d}{9}$

5) $\frac{3a}{2} - \frac{a}{6}$

6) $\frac{-x}{8} + \frac{x}{4}$

7) $\frac{5c}{3} - \frac{10c}{15}$

8) $\frac{7}{3a} + \frac{5}{3a}$

WEEK 2.

Day 2.1 - Find the product.

1) $\frac{2}{3} \cdot \frac{7}{8}$

2) $\frac{-5}{12} \cdot \frac{3}{10}$

3) $\frac{3}{4} \cdot (-12)$

4) $\frac{-4}{15} \cdot \frac{5}{8}$

5) $4\frac{1}{8} \cdot 1\frac{2}{3}$

Day 2.2 - Find the quotient.

1) $\frac{7}{12} \div \frac{2}{3}$

2) $\frac{-4}{9} \div \frac{-8}{11}$

3) $\frac{15}{16} \div \frac{5}{24}$

4) $\frac{7}{8} \div \frac{3}{10}$

5) $\frac{-4}{21} \div \frac{-12}{28}$

Day 2.3 - Evaluate the expression when $m = 7$, $n = 9$, and $q = 10$.

1) $n \cdot q$

4) $29 - m$

2) $\frac{18}{n}$

5) $16 \cdot q$

3) $m + q$

6) $m + n + q$

Day 2.4 - Evaluate the expression using the order of operations.

1) $8 \div 2 (2 + 2)$

2) $9 (5 - 3)^3$

3) $100 \cdot 2 \div 40 - 16 \div 4$

4) $550 - (11^2 - 7^2 \cdot 2)^2$

WEEK 3.

Day 3.1 - Find the sum.

1) $-14 + 30$

2) $-9 + 12 + (-4)$

3) $-21 + (-34)$

4) $-22 + (-13) + 6$

Day 3.2 - Find the difference.

1) $13 - (-8)$

2) $4 - (-20)$

3) $-2 - (-24)$

4) $-21 - (-6)$

Day 3.3 - Solve inequalities by adding or subtracting and graph them.

1) $p + 6 < 12$

2) $z - 2 \geq -11$

3) $w + 3 \geq 4$

4) $a - 3 > 2$

5) $-5 + x \leq -20$

6) $-12 + q > 39$

Day 3.4 - Solve inequalities by multiplying or dividing and graph them.

1) $3b > 27$

2) $\frac{k}{3} > 6$

3) $5f > -40$

4) $\frac{b}{-2} \geq 8$

5) $9s > -18$

6) $\frac{w}{4} > 2$

WEEK 4.

Day 4.1 - Solve each multi-step inequalities and graph them.

1) $160 + 4f < 500$

2) $m < 3m + 8$

3) $7 + 2t < 21$

4) $8x > 7x + 6$

5) $12 > 3x - 6$

6) $5t + 1 < -2t + 15$

Day 4.2 - Solve each compound inequalities and graph.

1) $4 \leq x + 2 \leq 8$

2) $n + 2 < 3$ OR $n + 3 > 7$

3) $-3 < x + 2 < 7$

4) $x - 1 < -1$ OR $x - 5 > -1$

5) $2 < x + 2 < 5$

Day 4.3 - Give the domain and range of each relation.

1) $\{(2, 3), (-1, 5), (0, -1), (3, 5), (5, 0)\}$

Domain:

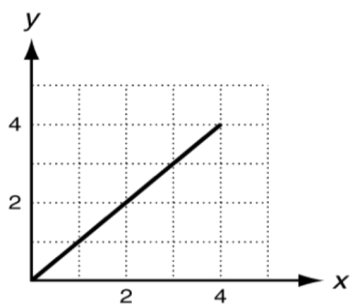
Range:

2) $\{(5, 1), (4, 2), (3, 3), (2, 4), (1, 5)\}$

Domain:

Range:

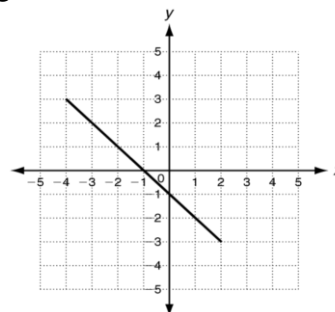
3) Use the graph to determine the domain and range:



Domain:

Range:

4) Use the graph to determine the domain and range:



Domain:

Range:

Day 4.4 - Evaluate each function for the given input values.

1) For $f(x) = x - 5$, find $f(x)$ when $x = 0$ and when $x = 3$.

2) For $f(x) = x^2 + 6$, find $f(x)$ when $x = 1$ and when $x = 2$.

3) For $f(x) = \frac{2}{3}x + 3$, find $f(x)$ when $x = 9$ and when $x = -3$.

4) For $f(x) = 3x + 1$, find $f(x)$ when $x = -2$ and when $x = 7$.

WEEK 5.

Day 5.1 - Find the x- and y-intercepts

1) $-3x + 5y = 30$

2) $4x + 2y = 16$

3) $y - x = -1$

4) $5x + 3y = 15$

5) $-2x = 9y - 18$

6) $x - 3y = -1$

Day 5.2 - Find the slope of each line.

The Slope Formula is: $m = \frac{y_2 - y_1}{x_2 - x_1}$

1) (1, 2) and (7, 7)

2) (3, 4) and (-5, 0)

3) $(5, -2)$ and $(5, 8)$

4) $(2, -5)$ and $(5, -2)$

5) $x - y = 5$

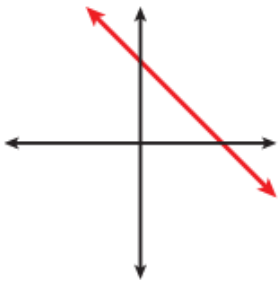
6) $3x + y = 9$

7) $y = 5x + 10$

8) $2x + 5y = 10$

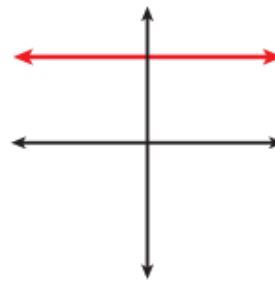
Day 5.3- Tell whether the slope of each line is positive, negative, zero, or undefined.

1)



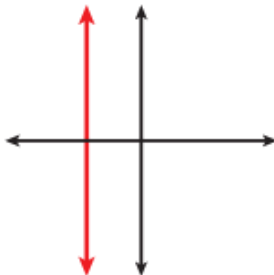
- a. positive
- b. negative
- c. zero
- d. undefined

2)



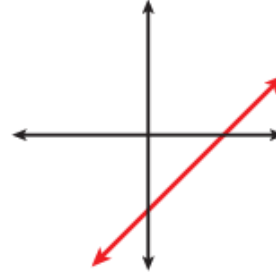
- a. positive
- b. negative
- c. zero
- d. undefined

3)



- a. positive
- b. negative
- c. zero
- d. undefined

4)



- a. positive
- b. negative
- c. zero
- d. undefined

Day 5.4- Write the equation that describes each line in slope-intercept form.

1) Slope: -7,
Y-intercept = 6

2) Slope: 4
Y-intercept = -3

3) Slope: 8
Y-intercept = 2

4) Slope: 0
Y-intercept = -3

5) Slope: 2
Point (3, 4) is on the line.

6) Slope: 8
Point (-3, 1) is on the line.

WEEK 6.

Day 6.1 - Each pair of points is on a line. Find the intercepts.

1) (5, 2) and (7, 4)
x-intercept =
y-intercept =

2) (2, 9) and (-4, -9)
x-intercept =
y-intercept =

Day 6.2 - Solve each system by Substitution.

1.
$$\begin{cases} y = x + 3 \\ y = 2x + 12 \end{cases}$$

2.
$$\begin{cases} x - 3y = 3 \\ 2x = 3y \end{cases}$$

$$3. \begin{cases} x + y = -1 \\ y = -2x + 3 \end{cases}$$

$$4. \begin{cases} y = -x \\ y = -2x - 5 \end{cases}$$

Day 6.3 - Solve each system by Elimination.

$$1. \begin{cases} x + 3y = 15 \\ 2x - 3y = -6 \end{cases}$$

$$2. \begin{cases} x + y = 12 \\ x - y = 2 \end{cases}$$

$$3. \begin{cases} 3x - y = 7 \\ 2x + y = 3 \end{cases}$$

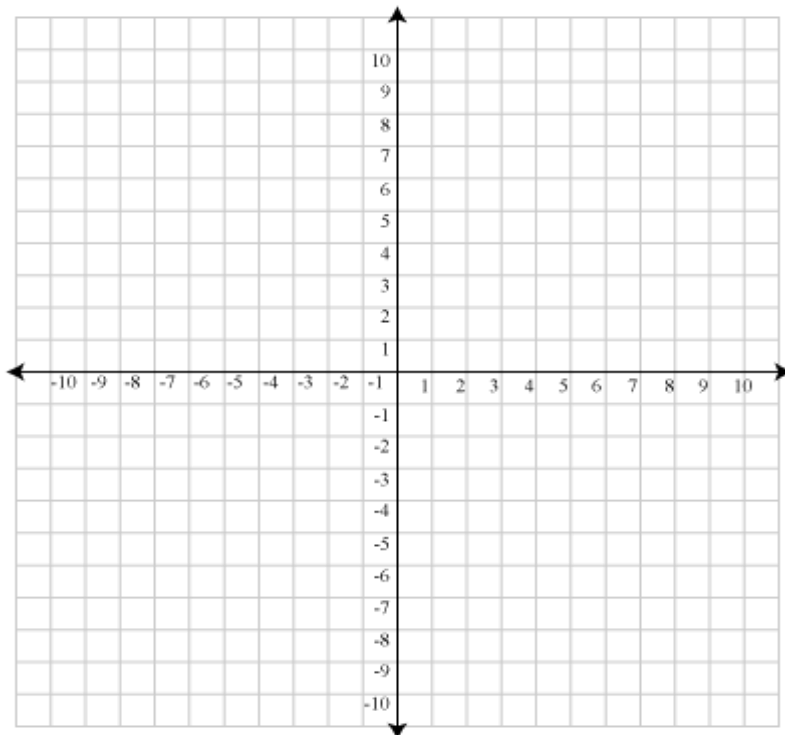
$$4. \begin{cases} -x + y = 5 \\ x - 5y = -9 \end{cases}$$

$$5. \begin{cases} 4x + y = 0 \\ x + y = -3 \end{cases}$$

$$6. \begin{cases} -2x + 5y = -1 \\ 3x + 2y = 11 \end{cases}$$

Day 6.4 - Solve each system by Graphing.

$$1. \begin{cases} y = -2x + 5 \\ y = 4x - 1 \end{cases}$$



WEEK 7.

Day 7.1 - Evaluate each expression and simplify.

1) $4m^0$

2) $a^3 \cdot a^{-6} \cdot a^{-2}$

3) $2x^0y^{-4}$

4) $(3x^4)^3$

5) $(m^3n^2)^5$

6) $(cd^6)^0 \cdot (c^5d^2)^2$

Day 7.2 - Evaluate each expression and simplify.

1) $\frac{c^4}{c^{-2}}$

2) $\frac{2s^5}{s^2}$

3) $\frac{s^{-3}}{t^{-5}}$

4) $\frac{4fg^{-5}}{12h^{-3}}$

5) $\frac{2x^{-3}y^{-2}}{z^4}$

6) $\left(\frac{4p^3}{2pq^4}\right)^2$

Day 7.3 - Find the product of the following polynomials and simplify.

1) $(2r)(4r)$

2) $(3a^3b)(2ab)$

3) $2x(x^2 - 4x + 6)$

4) $-3ab(ab - 2a^2b + 5a)$

Day 7.4 - Find the product of the following polynomials and simplify.

1) $(2q + 6)(4q + 5)$

2) $(5g - 8)(4g - 1)$

3) $(-3y + 1)(4y^2 - y - 7)$

4) $(p^2 + 3p)(9p^2 - 6p - 5)$

WEEK 8.**Day 8.1** - Find the product of the following polynomials and simplify.

1) $(2x + 4)^2$

2) $(3a^2 - b)^2$

3) $(5x + 8y)^2$

4) $(x + 9)(x - 9)$

Day 8.2 - Factor each polynomial completely.

1) $8c^2 + 7c$

2) $15x^5 - 18x$

3) $-8n^4 - 20n^2 - 28n$

4) $6m^6 + 18m^4 - 24m$

5) $-5k^2 - 15k - 25$

6) $2x^4 + 2x^3 - 20x^2 - 46x$

Day 8.3 - Factor out a common binomial factor.

1) $3m(m + 5) + 4(m + 5)$

2) $16b(b - 3) + (b - 3)$

3) $-9a(5a - b) - 5(5a - b)$

4) $2x(x^2 + 1) - (x^2 + 1)$



HANGAR ROAD 523. 524. RAMEY BASE

Box 250641. Z.C. 00604-0641

Phones: 890-2545

© 2023 FFBS Publishing